

Name: _____ Number: _____
Period: _____ Date: _____

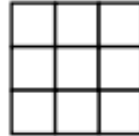
Growing Patterns

For each pattern draw the first, fourth, and fifth figures. Then, describe what the 100th figure looks like.

1.



2



3

2.




2




3

3.



2



3