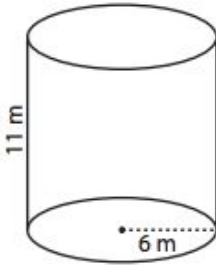


Name: _____ Period: _____

Surface Area & Volume of Cylinders & Spheres

Find the surface area and volume of each shape. You must show your work for each.

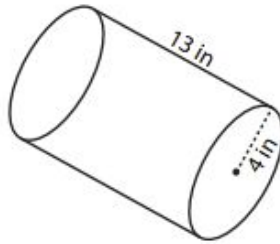
1)



Surface Area: _____

Volume: _____

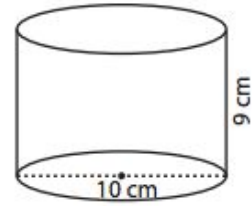
2)



Surface Area: _____

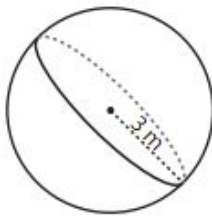
Volume: _____

3)



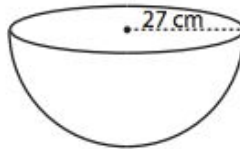
Surface Area: _____

Volume: _____



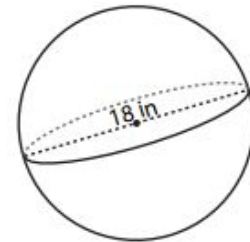
Surface Area: _____

Volume: _____



Surface Area: _____

Volume: _____



Surface Area: _____

Volume: _____