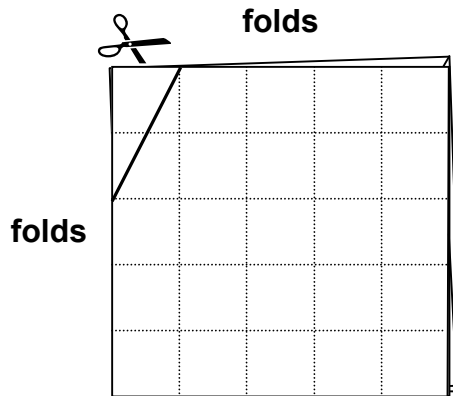

Cut Shapes

This problem gives you the chance to:

- recognize and name 2-D shapes
 - interpret different representations of shapes
-


Tom folds a piece of paper in half then in half again.

He cuts off the folded corner with one straight cut.



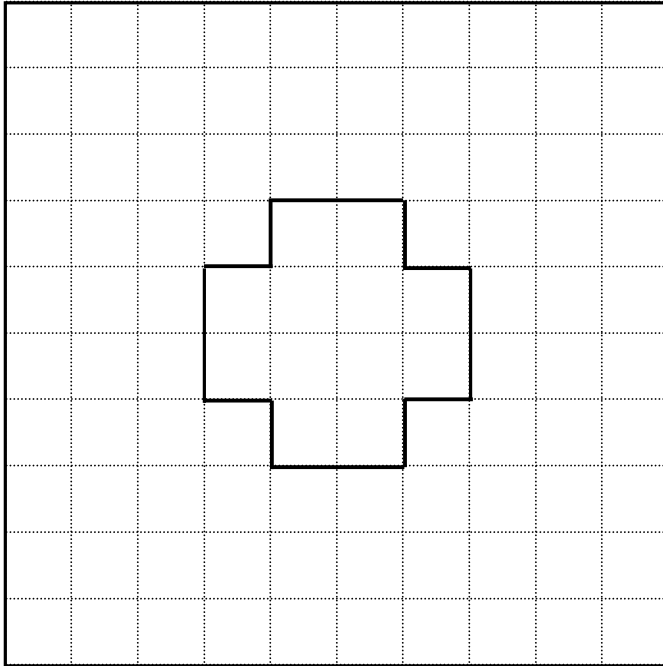
Tom unfolds the shape he cuts off the corner.

1. a. Draw Tom's shape.



b. What is the name of Tom's shape?

Here is another shape that Tom cut out from the corner of a piece of paper folded twice.



2. a. Draw the fold lines on this shape.
- b. Show how the corner of the folded paper is cut to make this shape.

